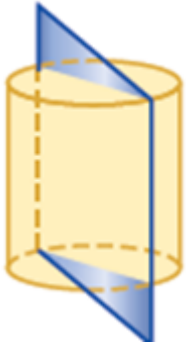


NAME _____

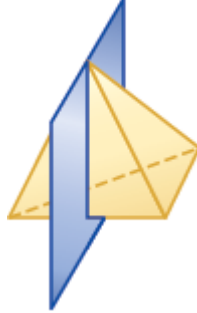
Cross-Sections

Describe the shape resulting from slicing the solid figures below with the indicated plane.

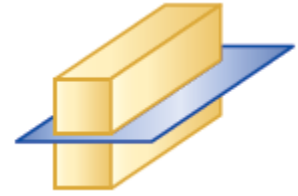
1. _____



2. _____



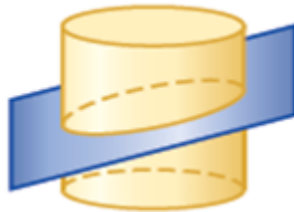
3. _____



4. _____



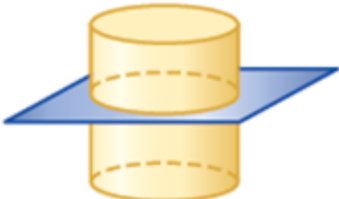
5. _____



6. _____



7. _____



8. _____



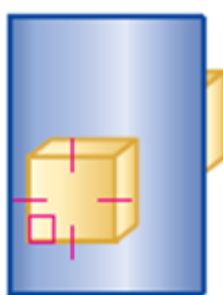
9. _____



10. _____



11. _____



12. _____

